



Name: _____ Class: _____

Look at each book page, and read the text.
Decide what type of text might have that type of writing.
Write the text type on the line.

explanation text instruction text non-chronological report diary
 letter autobiography news report biography and persuasive text

<p>Wonder Wash The world's wackiest washing powder! Your clothes will be bright, brilliant and smelling of bananas.</p> <p><u>Persuasive text</u></p>	<p>200g strawberries 100g pineapple 300g blueberries 300ml yoghurt</p> <p><u>Instruction text</u></p>	<p>Mr Peabody, aged 24, was the first on the scene. "It was a scary sight to see an escaped tiger," he was heard to say.</p> <p><u>Newspaper report</u></p>
<p>Diet: Most of the 40 species of paradise birds that live in the amazon basin eat insects, small vertebrae and fruit.</p> <p><u>Non-Chronological report</u></p>	<p>David had always wanted to be a pilot, and when he reached his eighteenth birthday and joined the RAF, his dreams were realised.</p> <p><u>Biography</u></p>	<p>Dear Mrs Wardle, Thank you for visiting our class today. The children enjoyed it very much.</p> <p><u>Letter</u></p>
<p>Melting: When a solid turns into a liquid, it is called melting. There is a temperature at which this happens, and it is called the melting point.</p> <p><u>Explanation text</u></p>	<p>The journey: When the boat finally set sail, I was so excited. I hoped that I would remember that day for the rest of my life. Little did I realise, the reasons why my wish would eventually come true.</p> <p><u>Autobiography</u></p>	<p>September 4th 2017 Today was my first day in KS2, and I was really nervous, but Mrs Devlin was very kind.</p> <p><u>Diary</u></p>



Name: _____ Class: _____

Add the possessive apostrophes to these sentences.

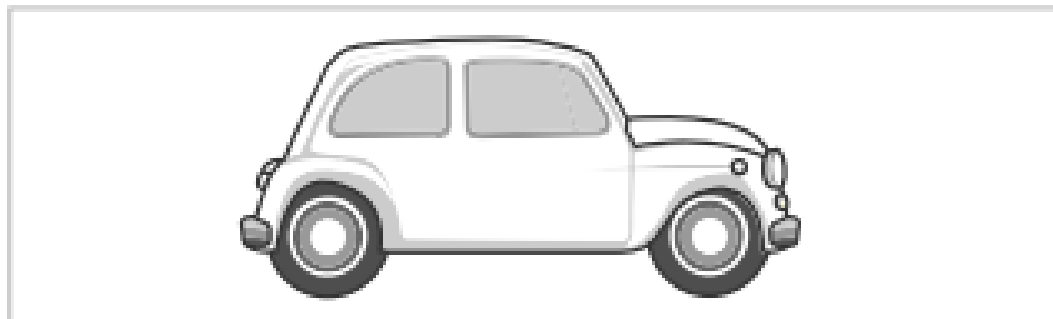
- 1 The giraffe's neck reached the highest leaves.
- 2 They picked up Sten's rucksack.
- 3 The lion stood by the water's edge.
- 4 The boy's teacher spoke for a long time.




- 5 The jungle guides' jeeps travelled one by one down the track.

Complete the sentence by writing the correct words and punctuation.

- 6 He turned the key to start the car's engine.



- 7 The monkeys' food was soon eaten up.





Name: _____ Class: _____

Complete the sentence by writing the correct words and punctuation.

- 8 The girls' trek was about to start.



- 9 Manu's water bottle needed filling.



- 10 The tree's leaves were starting to fall.





Name: _____

Class: _____

Look at the coins and notes. How much money is there?

1



83p

2



84p

3



95p

4



£55

5



£95



6



£7 and 90p

7



£50.67



8



£80 and 70p





Class:

Suggested answers

-

-

-

-



Answers

1. What is the name of the daughter of the King of Argos?

His daughter is called Danae.

2. What is the prison made of?

The prison is made of brass.

3. What do you think the king's daughter felt about her father for locking her up?

Responses could indicate a positive or negative view point:

I think the king's daughter would be pleased that he was protecting her even though she may not fully understand why he chose to lock her up to keep her from harm.

or

I think the king's daughter would have been cross and frustrated with her father for locking her away from everyone. There must have been other ways to protect her other than keeping her in prison.

4. What do you think the king's feelings are during 'The Brass Prison'?

Circle as many as you think apply.

brave	<input checked="" type="checkbox"/> frightened	confident	<input checked="" type="checkbox"/> worried	fearless
-------	--	-----------	---	----------

5. In The Magic Sandals, why is the king of the island described as cruel?

The king is described as cruel because he wants to force Perseus' mother to marry him and when she refuses, he takes revenge on Perseus.

6. What challenge would you have set Perseus if you were king?

A range of appropriate responses could be recorded here.

7. What do you think Perseus felt when he was given the challenge to capture the head of Medusa? Why do you think that?

Responses could include emotions such as fear, worry, anxiety, excitement, bravery or confidence. I think that Perseus felt afraid after he was given the challenge because Medusa and her sisters sound terrifying and Perseus doesn't have anyone to help him fight them.

The Quest of Medusa's Head **Answers**

mother. No matter how dangerous it may be I think he would want to try his best and be as brave as he could.

8. Who was going to help Perseus on his travels? How were they going to do this?

The Grey Sisters were going to give Perseus directions and The Maidens of the West were going to give him three things to help him,

9. Why do you think the gods gave Perseus some help to get started on his journey?

I think the gods helped Perseus to get started because they wanted him to succeed and to kill Medusa.



Name: _____ Class: _____

Read the sentences.

Select the correct sentence that implies the word in the question.

1 Select the sentence that implies that Stig is bored.

c

- a** Stig was watching the teacher write on the whiteboard carefully.
- b** Stig was smiling whilst he wrote the story in his book.
- c** Stig was staring out of the window whilst the teacher was talking.
- d** Stig jumped up to throw the ball through the hoop.

2 Select the sentence that implies that Stig is worried.

d

- a** Stig approached the group and asked if he could join in with their game.
- b** Stig was laughing at his friend's joke.
- c** Stig flew down the slide with a big grin on his face.
- d** Stig tried to walk quickly past the group of older children.

3 Select the sentence that implies that Stig is disappointed.

a

- a** Stig slowly lowered his hand when he wasn't picked.
- b** Stig was chosen for the football team.
- c** Stig received an invitation to Klara's party.
- d** Stig ate all the chocolate cake at the party.

4 Select the sentence that implies that Stig is a vet.

b

- a** Stig watched the dog show on the TV.
- b** Stig took the puppy's temperature.
- c** Stig watched Granny hold the puppy.
- d** Stig washed the puppy in the bath.



Name: _____ Class: _____

5 Select the sentence that implies that Stig is a teacher.

a

- a** Stig asked the children to line up for assembly.
- b** Stig mended the tap on the sink.
- c** Stig handed the change to the customer.
- d** Stig cooked a meal for the family.



Read the passages and select phrases that best describe what is being implied.

6 Stig rushed from his classroom to the assembly hall. His class were already sitting in their space, listening to the head teacher tell a story. He silently entered the hall and sat down with the rest of his class.

- a** Stig was reciting a poem he had written in assembly. ☐
- b** Stig was late for assembly. ☒
- c** Stig didn't want to go to assembly. ☐
- d** There was an assembly every day at school. ☐
- e** Stig didn't want to be noticed coming in late for assembly. ☒

7 Purdy crouched on the branch, peering down as Kitty stealthily crept past the tree. Suddenly, Purdy leapt from the branch and landed in front of Kitty. Kitty's back arched, her hair stood on end and she let out a sharp meow.

- a** Purdy and Kitty were cats. ☒
- b** Purdy and Kitty like each other. ☐
- c** Purdy was older than Kitty. ☐
- d** Purdy and Kitty don't like each other. ☒
- e** Kitty was cross that Purdy had landed in front of her. ☒



Name: _____ Class: _____

- 8** Granny stood up, rubbing soil from her hands and looked at the display of colour in front of her. She was pleased with her work and went inside. Her back and legs were aching, so she had a hot bath.

a Granny had been planting flowers.

☒

b Granny had been cutting the grass.

☐

c Granny had been gardening for a while.

☒

d Granny had been planting bulbs.

☐

e Granny was watering the plants.

☐

- 9** Stig washed and scrubbed the wheels. It took him a long time and his dad was really pleased with his hard work. Stig was pleased with his extra pocket money.

a Stig washed his dad's car.

☒

b Stig was washing the dishes.

☐

c Stig's dad paid him extra pocket money to wash his car.

☒

d Stig was hard-working.

☒

e Stig was helping his mum in the garden.

☐

- 10** Klara had got an invite to Sten's party. She had always wanted to go to a farm park, but it was the same day as her aunt's wedding. Klara later heard that Sten had met lots of animals at the park.

a Klara was disappointed she couldn't go to the farm park.

☒

b Klara went to Sten's party.

☐

c Klara went to her aunt's wedding.

☒

d Sten changed his party to another day so that Klara could go.

☐

e Sten changed his party to another place.

☐



Name: _____ Class: _____

Can you solve the following words problems?

- 1** There are 132 boxes of cereal on the shelves. 68 boxes are sold.
How many boxes are left on the shelf? 64
- 2** Klara has £5. She spends £2 on milk and 55p on bread.
How much money does she have left? £2 and 45p
- 3** Manu is making chocolate brownies. He needs to buy 170g of plain flour and 80g of cocoa powder.
How many boxes are left on the shelf? 250g
- 4** The tea bags were on offer. Stig bought 300 tea bags.
He gave Sten 135 tea bags.
How many did Stig have left? 165
- 5** There were 305 magazines on the shelves. 115 magazines were sold.
How many magazines were left on the shelves? 190
- 6** The freezer aisle needs cleaning. 420cm has already been cleaned.
The aisle is 950cm altogether.
How much more needs cleaning? 530
- 7** Stig has £3 and 50p to spend. Sten has £2 and 20p to spend.
How much money do they have altogether? £5 and 70p
- 8** The old deli counter was 214cm long. The new deli counter is 345cm long.
What is the difference between the two measurements? 131cm
- 9** Granny picked up a bunch of bananas weighing 300g.
She wanted more, so picked up another 180g.
What did the bananas weigh altogether? 480g
- 10** Klara spends £2 and 20p more than Stig. Stig spends 50p.
How much does Klara spend? £2 and 70p

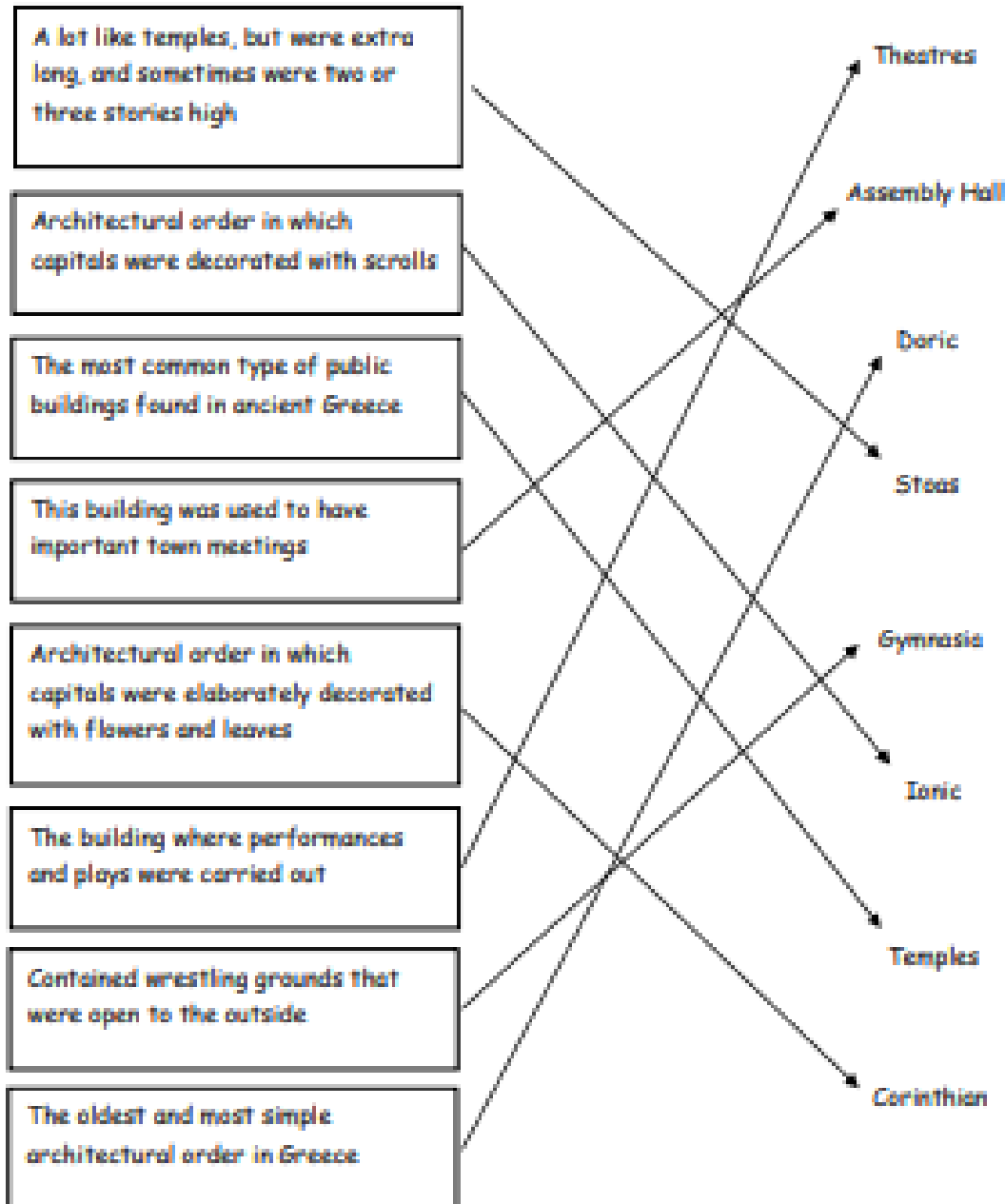


Can you write a word problem of your own, for your friend to answer on the back of this sheet?

Answer Key

Ancient Greek Architecture

Directions: Read each statement on the left carefully. Then draw a line to the correct term on the right.



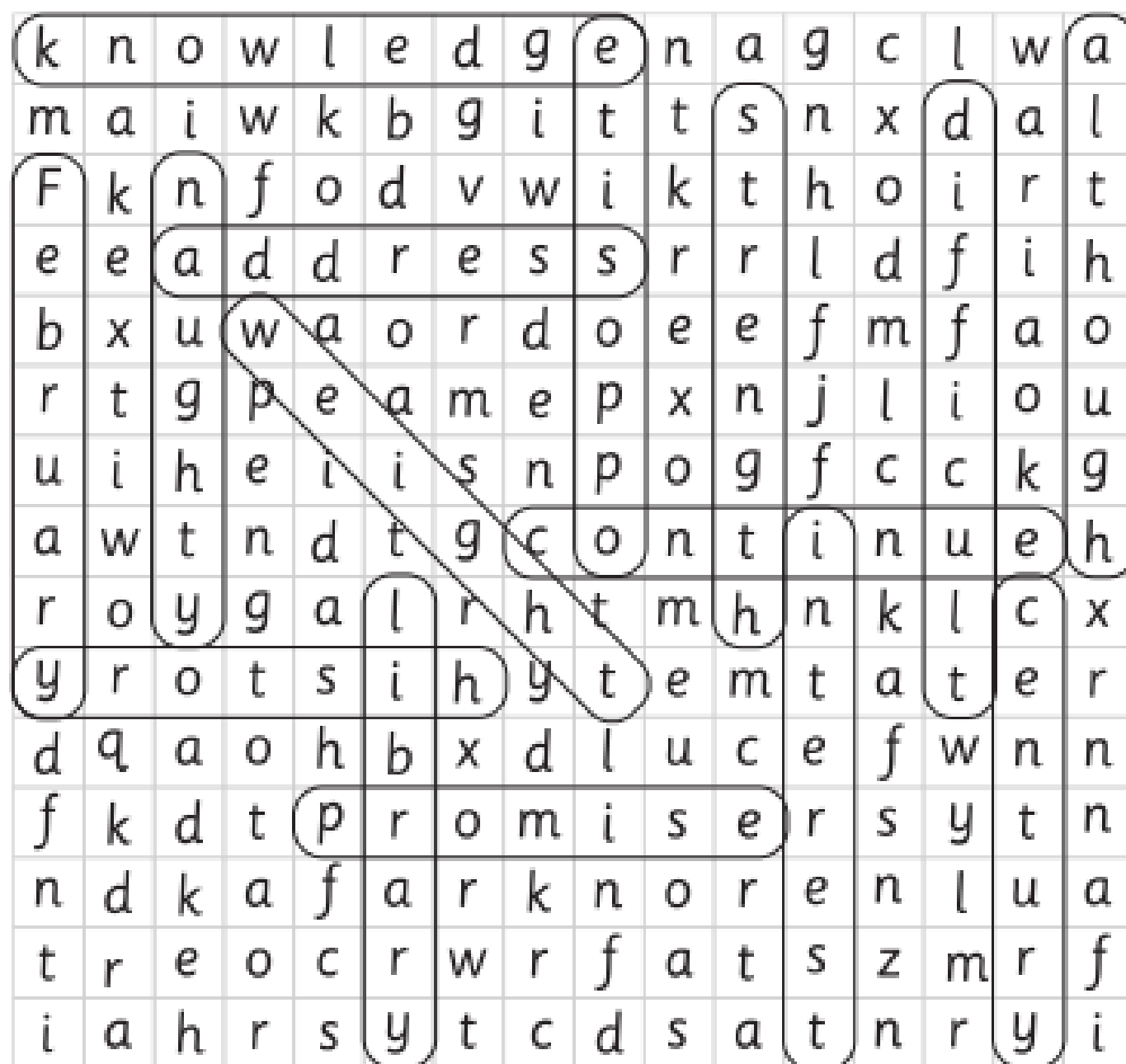


Making Baskets Part 2

Activity Sheet: Answer Sheet

Name: _____ Class: _____

Find these words.



address
century
continue
difficult
February
history

interest
knowledge
library
naughty
opposite
promise

strength
although
weight





Making Baskets Part 2

Activity Sheet

EducationCity

Name: _____ Class: _____

Write the word for each of the pictures below.



quarter _____



potatoes _____



calendar _____



eight _____

MASTERS CHALLENGE $2 \times 2 = 4$	$24 \div 6 = 4$	$10 \times 9 = 90$
$8 \times 7 = 56$	$44 \div 4 = 11$	$8 \times 12 = 96$
$3 \times 3 = 9$	$3 \times 4 = 12$	$8 \times 8 = 64$
$5 \times 4 = 20$	$4 \times 4 = 16$	$54 \div 9 = 6$
$1 \times 1 = 1$	$5 \times 3 = 15$	$40 \div 8 = 5$
$48 \div 6 = 8$	$3 \times 8 = 24$	$6 \times 3 = 18$
$28 \div 4 = 7$	$60 \div 12 = 5$	$6 \times 12 = 72$
$3 \times 6 = 18$	$36 \div 3 = 12$	$3 \times 6 = 18$
$4 \times 7 = 28$	$4 \times 11 = 44$	$4 \times 12 = 48$
$4 \times 5 = 20$	$3 \times 5 = 15$	$9 \times 5 = 45$
$9 \times 7 = 63$	$9 \times 11 = 99$	$9 \times 12 = 108$
$42 \div 7 = 6$	$4 \times 8 = 32$	$8 \times 9 = 72$
$45 \div 5 = 9$	$12 \times 11 = 132$	$12 \times 12 = 144$
$5 \times 6 = 30$	$9 \div 1 = 9$	$10 \div 5 = 2$
$3 \times 7 = 21$	$10 \times 3 = 30$	$6 \times 6 = 36$
$2 \times 9 = 18$	$9 \times 9 = 81$	$90 \div 10 = 9$
$36 \div 9 = 4$	$8 \times 3 = 24$	$10 \times 10 = 100$
$121 \div 11 = 11$	$72 \div 9 = 8$	$10 \times 3 = 30$
$1 \times 7 = 7$	$66 \div 6 = 11$	$48 \div 4 = 12$
$8 \times 4 = 32$	$1 \times 10 = 10$	$54 \div 6 = 9$
$99 \div 9 = 11$	$6 \times 5 = 30$	$108 \div 9 = 12$
$5 \times 7 = 35$	$5 \times 11 = 55$	$5 \times 12 = 60$
$9 \times 2 = 18$	$2 \times 8 = 16$	$8 \times 10 = 80$
$7 \times 7 = 49$	$7 \times 11 = 77$	$7 \times 12 = 84$
$11 \times 7 = 77$	$11 \times 11 = 121$	$11 \times 12 = 132$
$6 \times 10 = 60$	$63 \div 7 = 9$	$3 \times 9 = 27$
$3 \times 7 = 21$	$3 \times 11 = 33$	$3 \times 12 = 36$
$8 \times 5 = 40$	$4 \times 10 = 40$	$18 \div 2 = 9$
$2 \times 11 = 22$	$6 \times 9 = 54$	$10 \times 10 = 100$
$8 \times 7 = 56$	$60 \div 5 = 12$	$12 \div 1 = 12$
$4 \times 7 = 28$	$84 \div 7 = 12$	$9 \times 7 = 63$
$88 \div 8 = 11$	$10 \times 11 = 110$	$72 \div 6 = 12$
$10 \times 7 = 70$	$10 \times 11 = 110$	$10 \times 12 = 120$

$3 \times 12 = 36$

$120 \div 12 = 10$

$36 \div 3 = 12$

Master Master Challenge

$72 \div 8 = 9$	$6 \div 1 = 6$	$56 \div 7 = 8$	$18 \div 2 = 9$
$64 \div 8 = 8$	$18 \div 3 = 6$	$24 \div 3 = 8$	$40 \div 8 = 5$
$28 \div 7 = 4$	$30 \div 6 = 5$	$8 \div 8 = 1$	$56 \div 7 = 8$
$9 \div 9 = 1$	$32 \div 8 = 4$	$12 \div 4 = 3$	$24 \div 6 = 4$
$54 \div 9 = 6$	$12 \div 4 = 3$	$35 \div 7 = 5$	$12 \div 2 = 6$
$40 \div 8 = 5$	$18 \div 6 = 3$	$15 \div 3 = 3$	$9 \div 1 = 9$
$1 \div 1 = 1$	$16 \div 8 = 2$	$56 \div 8 = 7$	$35 \div 7 = 5$
$63 \div 9 = 7$	$2 \div 2 = 1$	$36 \div 4 = 9$	$42 \div 6 = 7$
$27 \div 9 = 3$	$36 \div 4 = 9$	$9 \div 1 = 9$	$15 \div 5 = 3$
$16 \div 2 = 8$	$54 \div 6 = 9$	$12 \div 6 = 2$	$6 \div 1 = 6$
$7 \div 1 = 7$	$72 \div 9 = 8$	$36 \div 9 = 4$	$9 \div 9 = 1$
$12 \div 3 = 4$	$14 \div 2 = 7$	$30 \div 5 = 6$	$24 \div 6 = 4$
$27 \div 3 = 9$	$24 \div 4 = 6$	$6 \div 1 = 6$	$45 \div 5 = 9$
$10 \div 2 = 5$	$30 \div 6 = 5$	$48 \div 6 = 8$	$8 \div 4 = 2$
$16 \div 4 = 4$	$45 \div 9 = 5$	$2 \div 2 = 1$	$7 \div 1 = 7$
$3 \div 3 = 1$	$16 \div 4 = 4$	$21 \div 7 = 3$	$9 \div 9 = 1$
$18 \div 3 = 6$	$21 \div 7 = 3$	$9 \div 3 = 3$	$30 \div 5 = 6$
$40 \div 5 = 8$	$81 \div 9 = 9$	$30 \div 6 = 5$	$32 \div 4 = 8$
$32 \div 4 = 8$	$16 \div 2 = 8$	$14 \div 2 = 7$	$12 \div 3 = 4$
$24 \div 4 = 6$	$35 \div 5 = 7$	$56 \div 8 = 7$	$63 \div 9 = 7$
$45 \div 5 = 9$	$49 \div 7 = 7$	$36 \div 4 = 9$	$24 \div 8 = 3$
$40 \div 5 = 8$	$54 \div 9 = 6$	$18 \div 9 = 2$	$25 \div 5 = 5$
$20 \div 4 = 5$	$15 \div 3 = 5$	$20 \div 5 = 4$	$32 \div 4 = 8$
$48 \div 6 = 8$	$20 \div 5 = 4$	$24 \div 8 = 3$	$36 \div 9 = 4$
$54 \div 6 = 9$	$28 \div 7 = 4$	$24 \div 4 = 6$	$48 \div 8 = 6$



Name: _____ Class: _____

Sten is going shopping.

Help him work out how much money he needs to buy the things he wants.

How much change does he get from £1?

Note pad	64p
Pencil	39p
Eraser	42p
Glue stick	28p
Pencil sharpener	49p
Crayon	19p
Felt tip pen	52p
Ruler	47p



Items	Cost	Change from £1
2 erasers	$42p + 42p = 84p$	16p
Pencil and eraser	$39p + 42p = 81p$	19p
Pencil sharpener and crayon	$49p + 19p = 68p$	32p
Ruler and glue stick	$47p + 28p = 75p$	25p
2 rulers	$47p + 47p = 94p$	6p
Pencil, crayon and eraser	$39p + 19p + 42p = 100p$	0p
Note pad and crayon	$64p + 19p = 83p$	17p
Felt tip pen and crayon	$52p + 19p = 71p$	29p




Name: _____ Class: _____

Sten is going shopping.

Help him work out how much money he needs to buy the things he wants.

How much change does he get from £2?

Pencil case	£1 and 55p
Pencil	39p
Eraser	42p
Hole punch	£1 and 23p
Pencil sharpener	49p
Crayon	19p
Book	£1 and 29p
Ruler	47p



Items	Cost	Change from £2
Pencil case and pencil	$£1 \text{ and } 55p + 39p = £1 \text{ and } 94p$	6p
Pencil, ruler and crayon	$39p + 47p + 19p = £1 \text{ and } 5p$	95p
Book and ruler	$£1 \text{ and } 29p + 47p = £1 \text{ and } 76p$	24p
Hole punch and pencil sharpener	$£1 \text{ and } 23p + 49p = £1 \text{ and } 72p$	28p
Pencil case and eraser	$£1 \text{ and } 55p \text{ and } 42p = £1 \text{ and } 97p$	3p
Eraser, ruler and pencil sharpener	$£42p + 47p + 49p = £1 \text{ and } 38p$	62p
Book and crayon	$£1 \text{ and } 29p + 19p = £1 \text{ and } 48p$	52p
Hole punch and ruler	$£1 \text{ and } 23p + 47p = £1 \text{ and } 70p$	30p

